








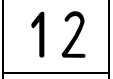
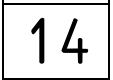
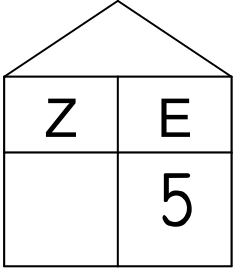







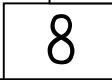



Hier sind die Zahlen von 1 bis 20 dargestellt.

Schreibe sie in das Kästchen und kontrolliere unten!

<input type="text"/> .	<input type="text"/>  	<input type="text"/> $10 - 6$	<input type="text"/> 	<input type="text"/>  
<input type="text"/> nach sieben	<input type="text"/>  	<input type="text"/> sieb- zehn	<input type="text"/>  + 	<input type="text"/> vor siebzehn
<input type="text"/>  	<input type="text"/> 	<input type="text"/> $1Z\ 8E$	<input type="text"/>  	<input type="text"/>   
<input type="text"/> 	<input type="text"/> $5 + 4$	<input type="text"/> eins plus eins	<input type="text"/>   	<input type="text"/> $10 + 9$

1	2	3	4	5	6	7	8	9	10	11	12	13	14	15	16	17	18	19	20