

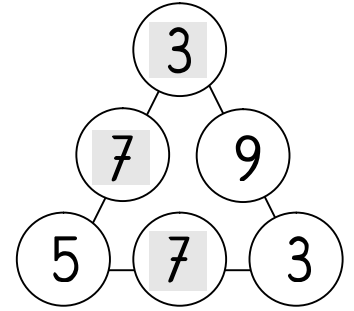
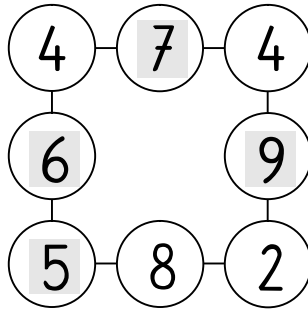
15

○ ○ ○ = 15



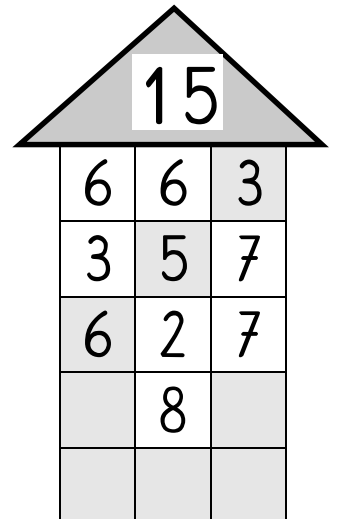
○ ○ ○ = 15

12	○	○	4
11	○	○	3
1	○	○	11
4	○	○	14
10	○	○	5
3	○	○	2
13	○	○	12
9	○	○	10
6	○	○	6
5	○	○	9



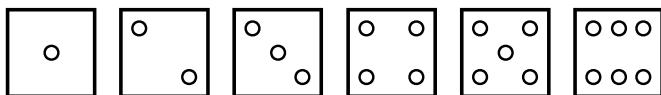
15

5	9	9	6	8
9	4	7	7	8
5	8	7	6	4
5	8	3	6	9
10	5	4	8	9

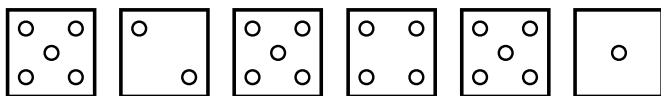


Mit welchen 3 Würfeln kann man die Zahl 15 erreichen?

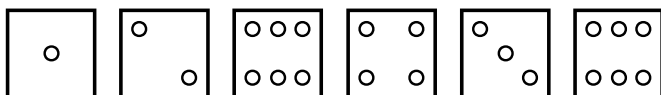
Kennzeichne die passenden Würfel und schreibe die Rechnung auf



4 + 5 + 6 = 15



5 + 5 + 5 = 15



6 + 3 + 6 = 15